

さんすう

ひきざんのけいさん  
のこりはいくつ




なまえ


## ステップ 1 えやずでけいさん

① のこりはいくつ	1 - 1 ~ 5
② ひかれるかずが 2 と 3 のけいさん	1 - 6 ~ 8
③ ひかれるかずが 4 のけいさん	1 - 9 ~ 11
④ ひかれるかずが 5 のけいさん	1 - 12 ~ 14
⑤ ひかれるかずが 6 のけいさん	1 - 15 ~ 17
⑥ ひかれるかずが 7 のけいさん	1 - 18 ~ 20
⑦ ひかれるかずが 8 のけいさん	1 - 21 ~ 23
⑧ ひかれるかずが 9 のけいさん	1 - 24 ~ 26
⑨ ひかれるかずが 10 のけいさん	1 - 27 ~ 29


のこりは いくつ




2 とると



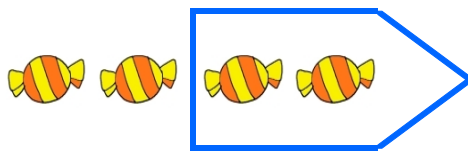
1 とると




3 とると



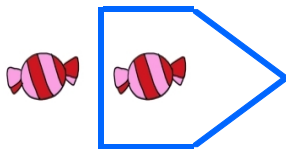
2 とると



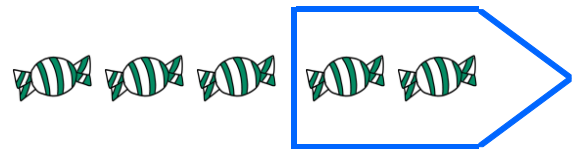
2 とると



1 とると



1 とると




2 とると


のこりは いくつ




2 とると




2 とると




2 とると



1 とると



3 とると




3 とると



1 とると



1 とると




1 とると



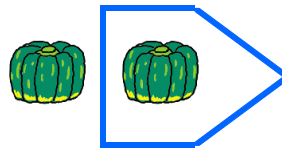
3 とると



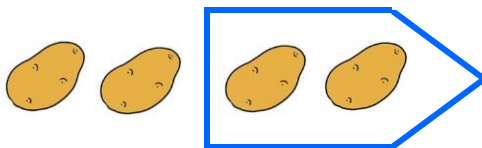
のこりは いくつ




1 とると




1 とると



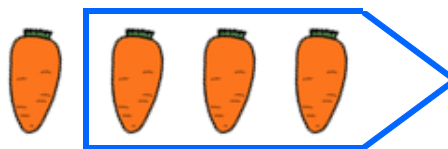
2 とると



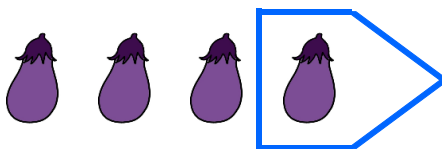
4 とると




2 とると




3 とると



1 とると



4 とると

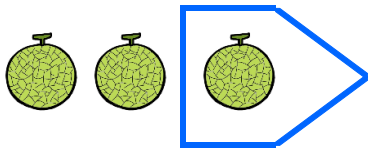


1 とると

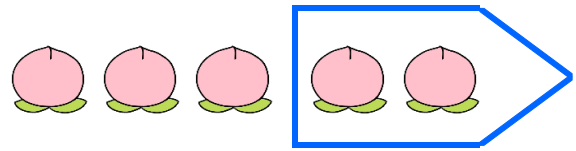


1 とると

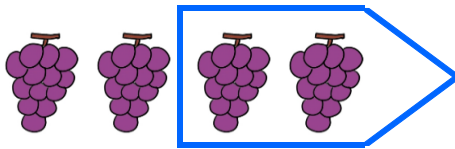
のこりは いくつ




1 とると



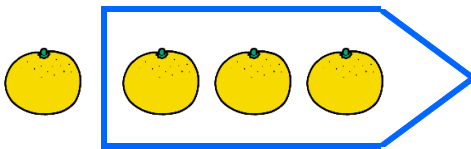
2 とると




2 とると




1 とると




3 とると




3 とると




1 とると



1 とると



2 とると



3 とると

のこりは いくつに なりますか

りんごが 5 こ



2 ことると



のこりは

3 こ



かずを かいて しきを よみましょう。

5 から 2 とると のこりは

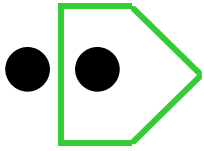
しき

—

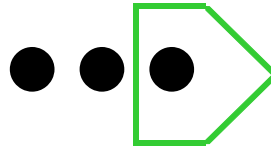
=

ひく

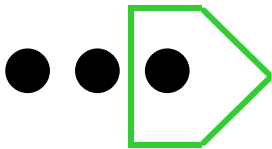
のこりは いくつ




2から 1をとると




3から 1をとると



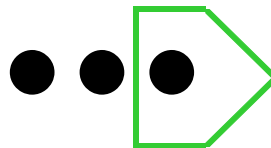
3から 1をとると



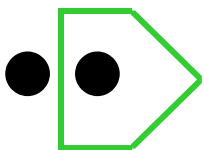
3から 2をとると




3から 2をとると



3から 1をとると



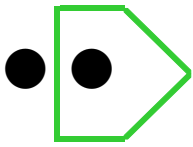
2から 1をとると



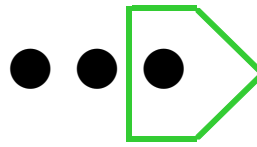
3から 2をとると




のこりは いくつ



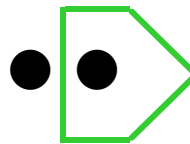
2	-		=	
---	---	--	---	--



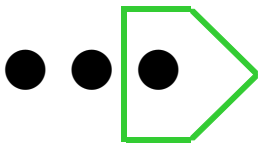
3			=	
---	--	--	---	--




3			=	
---	--	--	---	--




2			=	
---	--	--	---	--



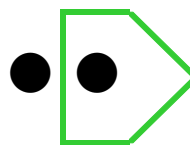
3			=	
---	--	--	---	--



3			=	
---	--	--	---	--

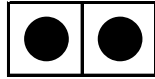


3			=	
---	--	--	---	--




2			=	
---	--	--	---	--

のこりは いくつ




2



$$2 - 1 = \square$$



$$2 - 1 = \square$$



3



$$3 - 1 = \square$$



$$3 - 2 = \square$$



$$3 - 2 = \square$$



$$3 - 1 = \square$$




$$3 - 1 = \square$$

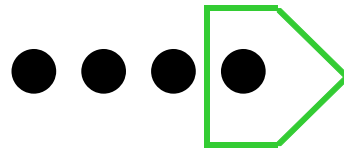


$$3 - 2 = \square$$


のこりは いくつ




4から 3をとると



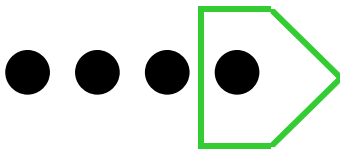
4から 1をとると



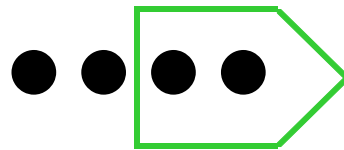
4から 2をとると




4から 3をとると




4から 1をとると



4から 2をとると




4から 3をとると

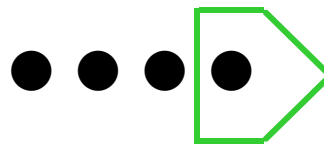


4から 1をとると


のこりは いくつ



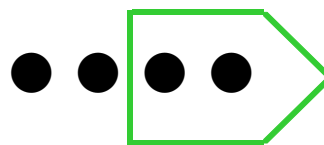
4			=	
---	--	--	---	--



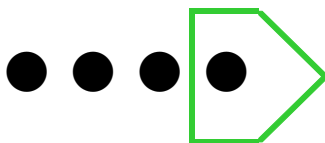
4			=	
---	--	--	---	--




4			=	
---	--	--	---	--




4			=	
---	--	--	---	--



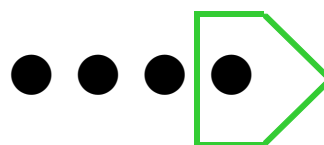
4			=	
---	--	--	---	--



4			=	
---	--	--	---	--

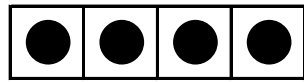


4			=	
---	--	--	---	--



4			=	
---	--	--	---	--


ひくかずに ~~を~~ かいて、こたえを みつけましょう。



4



$$4 - 1 = \square$$



$$4 - 2 = \square$$



$$4 - 3 = \square$$



$$4 - 3 = \square$$



$$4 - 2 = \square$$



$$4 - 1 = \square$$



$$4 - 3 = \square$$



$$4 - 2 = \square$$




$$4 - 1 = \square$$




$$4 - 3 = \square$$


のこりは いくつ




5から 4をとると



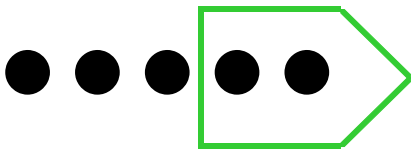
5から 2をとると




5から 3をとると




5から 1をとると




5から 2をとると



5から 3をとると

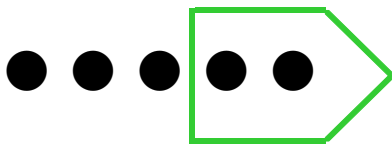


5から 1をとると




5から 4をとると


のこりは いくつ




5			=	
---	--	--	---	--




5			=	
---	--	--	---	--




5			=	
---	--	--	---	--




5			=	
---	--	--	---	--




5			=	
---	--	--	---	--



5			=	
---	--	--	---	--




5			=	
---	--	--	---	--



5			=	
---	--	--	---	--

ひくかずに ~~を~~ かいて、こたえを みつけましょう。



5



$$5 - 3 = \square$$



$$5 - 2 = \square$$



$$5 - 1 = \square$$



$$5 - 4 = \square$$



$$5 - 4 = \square$$



$$5 - 1 = \square$$



$$5 - 3 = \square$$



$$5 - 2 = \square$$




$$5 - 1 = \square$$



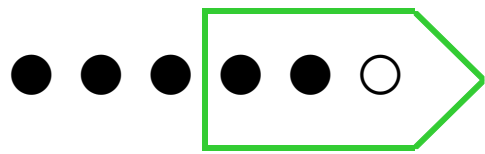
$$5 - 3 = \square$$




のこりは いくつ




6から 1をとると




6から 3をとると



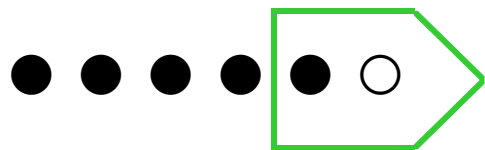
6から 4をとると




6から 5をとると




6から 3をとると



6から 2をとると




6から 5をとると

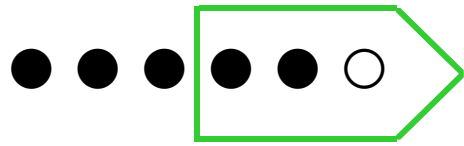


6から 1をとると


のこりは いくつ



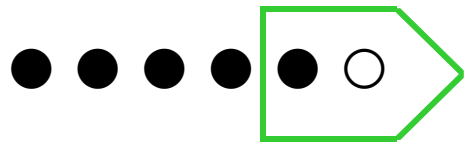
6			=	
---	--	--	---	--




6			=	
---	--	--	---	--




6			=	
---	--	--	---	--



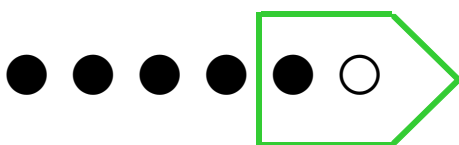
6			=	
---	--	--	---	--




6			=	
---	--	--	---	--



6			=	
---	--	--	---	--

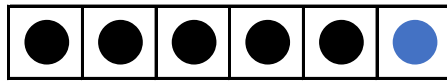


6			=	
---	--	--	---	--





6			=	
---	--	--	---	--


ひくかずに ~~を~~ かいて、こたえを みつけましょう。





6


  
 $6 - 2 = \square$


  
 $6 - 5 = \square$


  
 $6 - 3 = \square$


  
 $6 - 1 = \square$


  
 $6 - 4 = \square$

  
 $6 - 2 = \square$

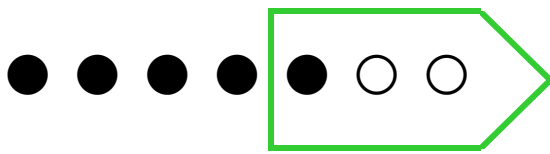
  
 $6 - 5 = \square$

  
 $6 - 3 = \square$


  
 $6 - 4 = \square$

  
 $6 - 1 = \square$


のこりは いくつ




7から 3をとると




7から 5をとると




7から 6をとると




7から 2をとると




7から 1をとると



7から 4をとると




7から 5をとると




7から 6をとると


のこりは いくつ




7			=	
---	--	--	---	--




7			=	
---	--	--	---	--




7			=	
---	--	--	---	--




7			=	
---	--	--	---	--



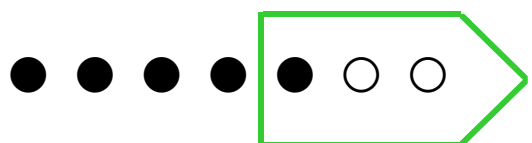
7			=	
---	--	--	---	--



7			=	
---	--	--	---	--

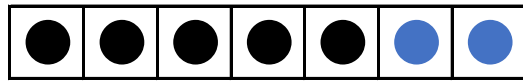


7			=	
---	--	--	---	--

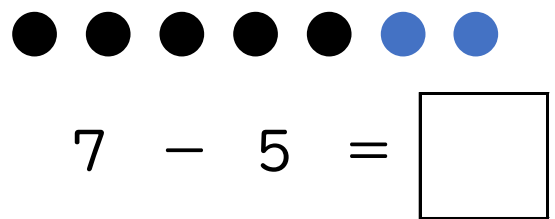
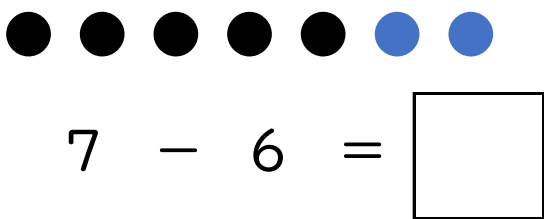
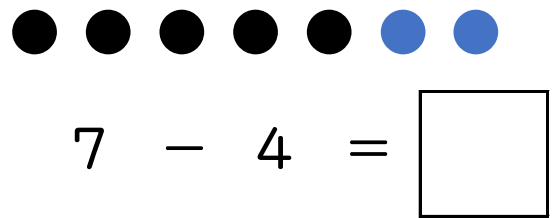
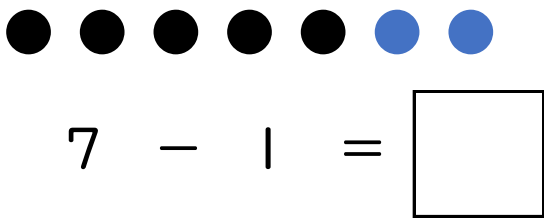
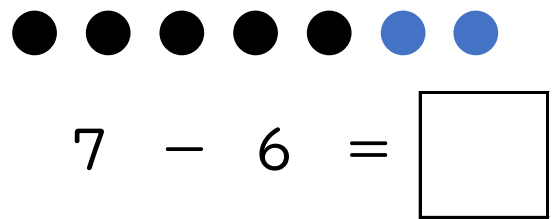
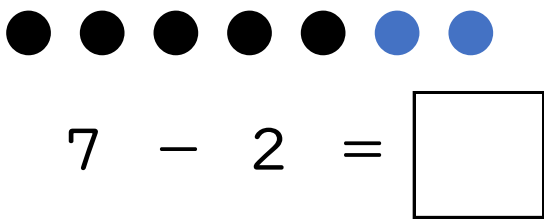
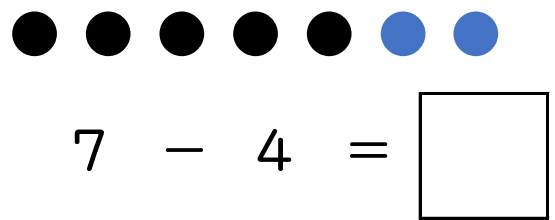
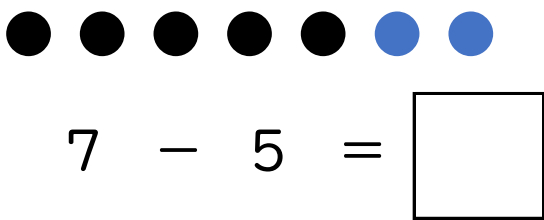
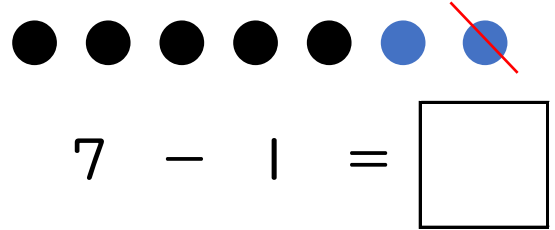
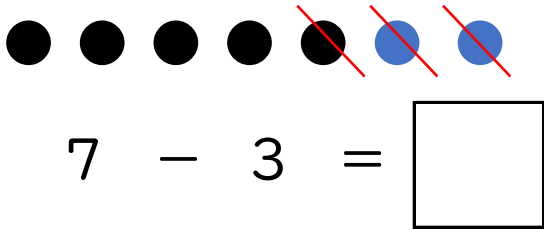


7			=	
---	--	--	---	--

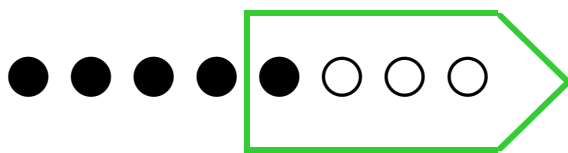
ひくかずに ~~を~~ かいて、こたえを みつけましょう。



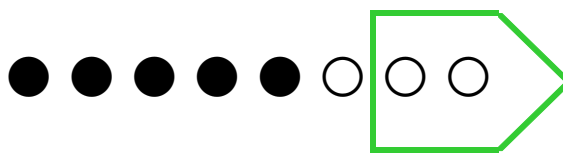
7




のこりは いくつ




8から 4をとると



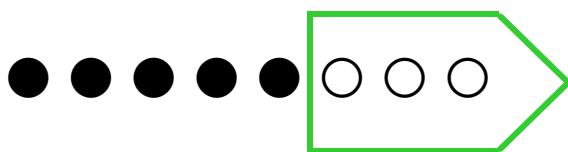
8から 2をとると




8から 5をとると




8から 7をとると




8から 3をとると



8から 6をとると

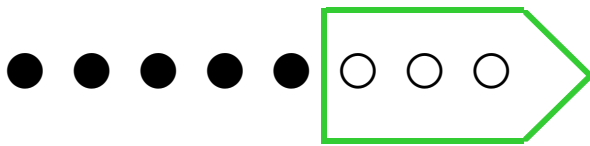


8から 7をとると




8から 1をとると


のこりは いくつ




8			=	
---	--	--	---	--




8			=	
---	--	--	---	--




8			=	
---	--	--	---	--



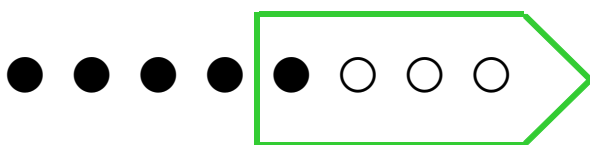
8			=	
---	--	--	---	--




8			=	
---	--	--	---	--



8			=	
---	--	--	---	--



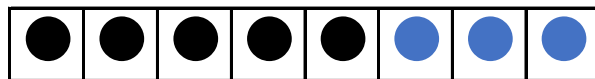
8			=	
---	--	--	---	--



8			=	
---	--	--	---	--



ひくかずに ~~を~~ かいて、こたえを みつけましょう。



8

$$8 - 2 = \square$$

$$8 - 7 = \square$$

$$8 - 5 = \square$$

$$8 - 3 = \square$$

$$8 - 4 = \square$$

$$8 - 6 = \square$$

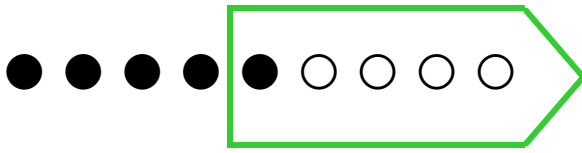
$$8 - 1 = \square$$

$$8 - 3 = \square$$

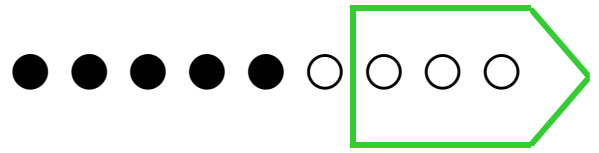
$$8 - 7 = \square$$

$$8 - 6 = \square$$

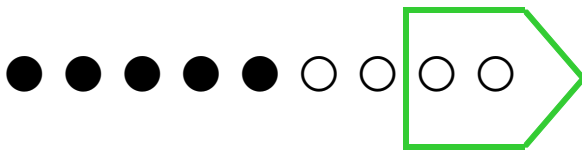
のこりは いくつ




9から 5をとると




9から 3をとると



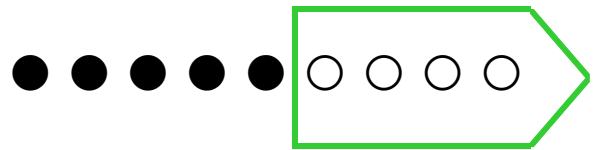
9から 2をとると




9から 8をとると




9から 7をとると



9から 4をとると

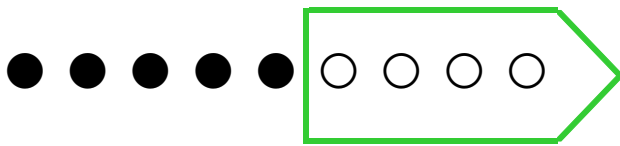


9から 6をとると




9から 1をとると


のこりは いくつ



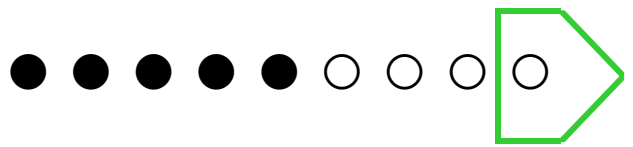
9			=	
---	--	--	---	--



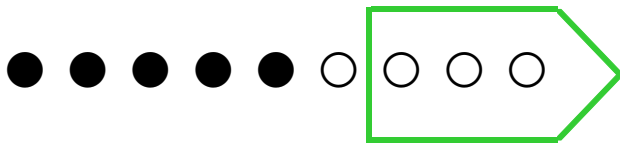
9			=	
---	--	--	---	--




9			=	
---	--	--	---	--




9			=	
---	--	--	---	--



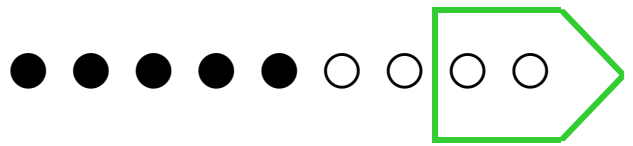
9			=	
---	--	--	---	--



9			=	
---	--	--	---	--

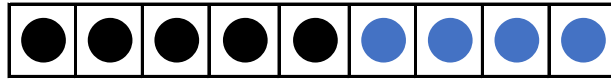


9			=	
---	--	--	---	--




9			=	
---	--	--	---	--

ひくかずに ~~を~~ かいて、こたえを みつけましょう。



9



$$9 - 4 = \square$$



$$9 - 2 = \square$$



$$9 - 8 = \square$$



$$9 - 5 = \square$$



$$9 - 3 = \square$$



$$9 - 7 = \square$$



$$9 - 6 = \square$$



$$9 - 1 = \square$$

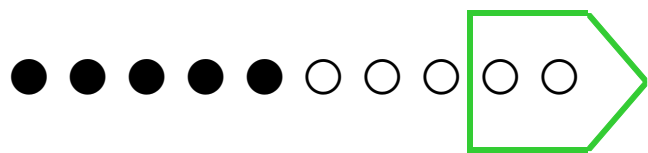


$$9 - 4 = \square$$

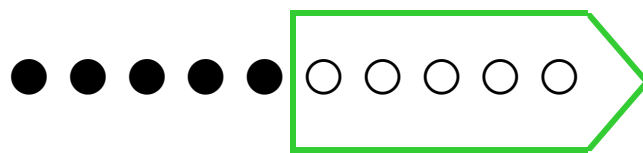


$$9 - 6 = \square$$

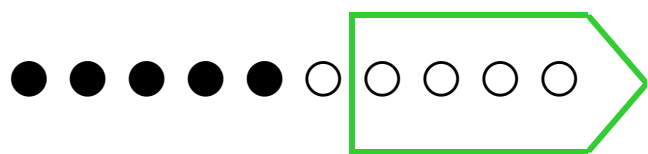
のこりは いくつ




10 から 2 を とると




10 から 5 を とると




10 から 4 を とると




10 から 8 を とると




10 から 7 を とると



10 から 3 を とると




10 から 9 を とると




10 から 6 を とると

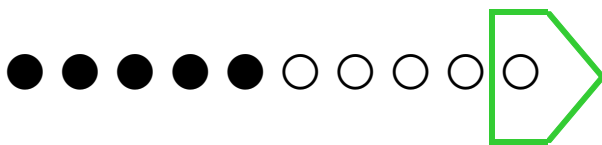
のこりは いくつ




10			=	
----	--	--	---	--



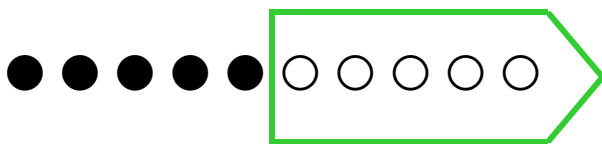
10			=	
----	--	--	---	--




10			=	
----	--	--	---	--



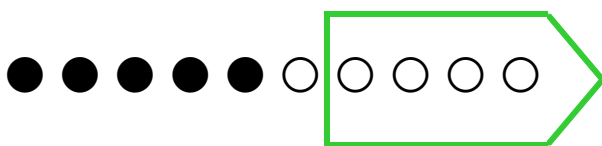
10			=	
----	--	--	---	--




10			=	
----	--	--	---	--



10			=	
----	--	--	---	--

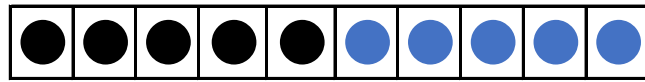


10			=	
----	--	--	---	--



10			=	
----	--	--	---	--


ひくかずに ~~を~~ かいて、こたえを みつけましよう。



10



$$10 - 3 = \square$$



$$10 - 5 = \square$$



$$10 - 8 = \square$$



$$10 - 2 = \square$$



$$10 - 6 = \square$$



$$10 - 1 = \square$$



$$10 - 4 = \square$$



$$10 - 7 = \square$$



$$10 - 9 = \square$$



$$10 - 8 = \square$$